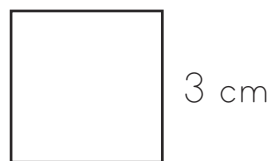


Finding Areas of Squares

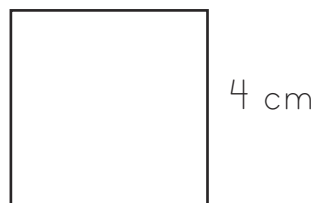
Find the area of the shapes.

1.



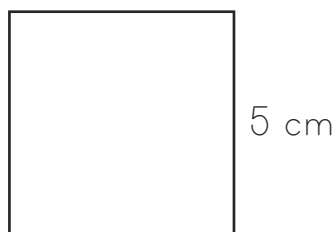
Area = _____ cm^2

2.



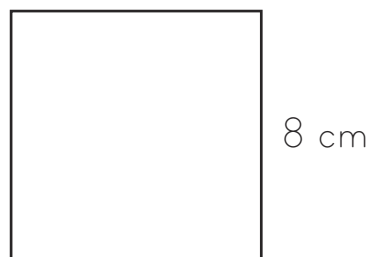
Area = _____ cm^2

3.



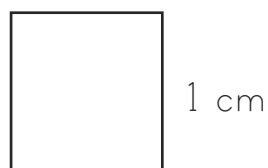
Area = _____ cm^2

4.



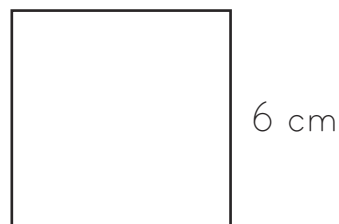
Area = _____ cm^2

5.



Area = _____ cm^2

6.



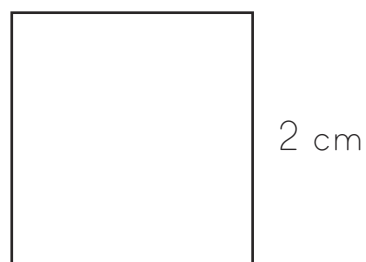
Area = _____ cm^2

7.



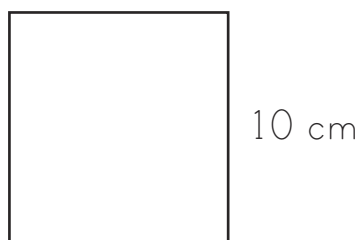
Area = _____ cm^2

8.



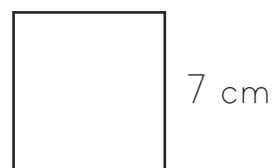
Area = _____ cm^2

9.



Area = _____ cm^2

10.




Area = _____ cm^2

Finding Areas of Squares **Answers**


1. 9 cm^2
2. 16 cm^2
3. 25 cm^2
4. 64 cm^2
5. 1 cm^2
6. 36 cm^2
7. 81 cm^2
8. 4 cm^2
9. 100 cm^2
10. 49 cm^2

Finding Areas of Squares


Find the area of the shapes.




Area = _____ cm^2




Area = _____ cm^2




Area = _____ cm^2




Area = _____ cm^2




Area = _____ cm^2




Area = _____ cm^2



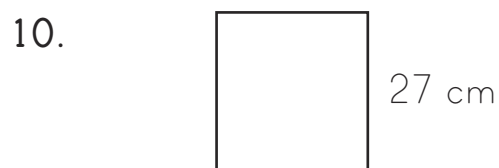
Area = _____ cm^2



Area = _____ cm^2



Area = _____ cm^2




Area = _____ cm^2

Finding Areas of Squares **Answers**


1. 144 cm^2
2. 225 cm^2
3. 441 cm^2
4. 841 cm^2
5. 900 cm^2
6. 196 cm^2
7. 169 cm^2
8. 289 cm^2
9. 625 cm^2
10. 729 cm^2

Finding Areas of Squares


Find the area of the shapes.




Area = _____ cm^2



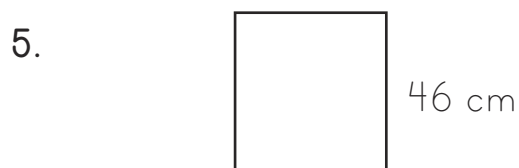
Area = _____ cm^2




Area = _____ cm^2




Area = _____ cm^2




Area = _____ cm^2




Area = _____ cm^2



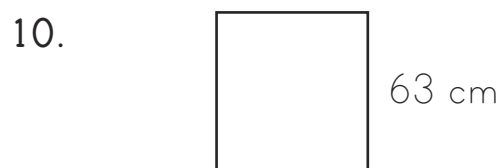
Area = _____ cm^2



Area = _____ cm^2



Area = _____ cm^2



Area = _____ cm^2

Finding Areas of Squares **Answers**

1. 2500 cm^2
2. 2401 cm^2
3. 7569 cm^2
4. 4225 cm^2
5. 2116 cm^2
6. 5184 cm^2
7. 7921 cm^2
8. 9025 cm^2
9. $10\,000 \text{ cm}^2$
10. 3969 cm^2